



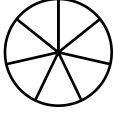
Name : _____

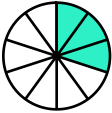
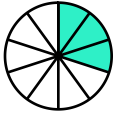
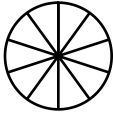
Score : _____

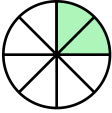
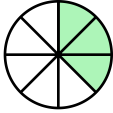
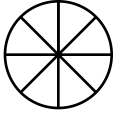
Teacher : _____

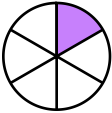
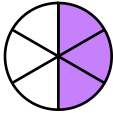
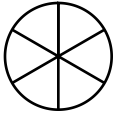
Date : _____

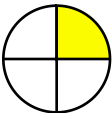
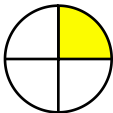
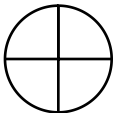
Visually Adding Simple Fractions

1)  +  = 
 $\frac{3}{7} + \frac{3}{7} =$ _____

2)  +  = 
 $\frac{3}{10} + \frac{3}{10} =$ _____

3)  +  = 
 $\frac{2}{8} + \frac{3}{8} =$ _____

4)  +  = 
 $\frac{1}{6} + \frac{3}{6} =$ _____

5)  +  = 
 $\frac{1}{4} + \frac{1}{4} =$ _____


Name : _____


Score : _____


Teacher : _____


Date : _____


Visually Adding Simple Fractions

1)  $\frac{3}{7} + \frac{3}{7} = \frac{6}{7}$

2)  $\frac{3}{10} + \frac{3}{10} = \frac{6}{10}$

3)  $\frac{2}{8} + \frac{3}{8} = \frac{5}{8}$

4)  $\frac{1}{6} + \frac{3}{6} = \frac{4}{6}$

5)  $\frac{1}{4} + \frac{1}{4} = \frac{2}{4}$